



Vejledning til underviseren

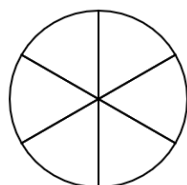
Du har hentet en opgave fra matematiksidens.dk. Den opgave du står med, ligger i mange versioner på hjemmesiden. Derfor er det vigtigt, at du gemmer facitlisten til din version. Du kan se nummeret på din version oppe i højre hjørne. Det betyder, at du efterfølgende ikke kan hente facitlisten på matematiksidens.dk. Det betyder også, at du kan gentage opgaven så mange gange du vil, da det er nye opgaver, hver gang du henter en ny version.



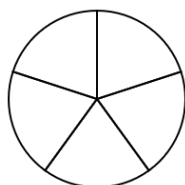
Opgaven

16 opgaver, hvor eleverne skal male den brøkdelt, der står under hver cirkel. Hver cirkel eleverne skal male er inddelt, så eleverne skal ikke selv inddele cirklen

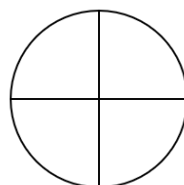
Dit navn:

Brøker: Mal brøkdel - med inddeling**Mal cirklen i den brøkdel der står under cirklen**

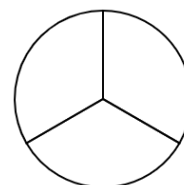
$$\frac{3}{6}$$



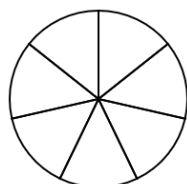
$$\frac{4}{5}$$



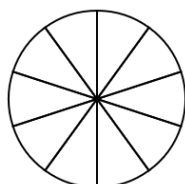
$$\frac{2}{4}$$



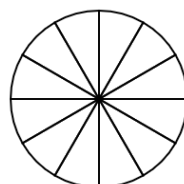
$$\frac{3}{3}$$



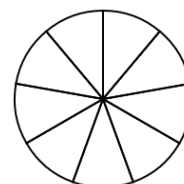
$$\frac{3}{7}$$



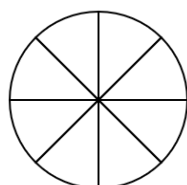
$$\frac{10}{10}$$



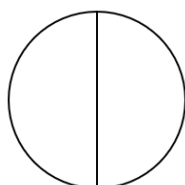
$$\frac{11}{12}$$



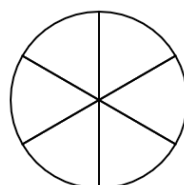
$$\frac{8}{9}$$



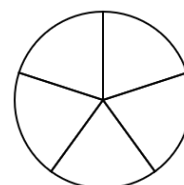
$$\frac{5}{8}$$



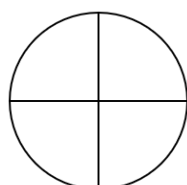
$$\frac{1}{2}$$



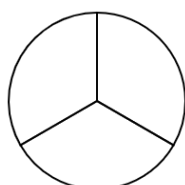
$$\frac{3}{6}$$



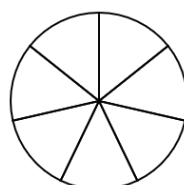
$$\frac{1}{5}$$



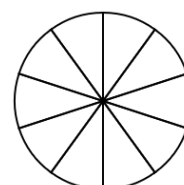
$$\frac{4}{4}$$



$$\frac{2}{3}$$

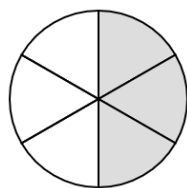


$$\frac{2}{7}$$

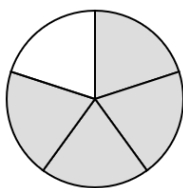


$$\frac{4}{10}$$

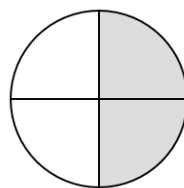
Brøker: Mal brøkdelt - med inddeling - Facitliste



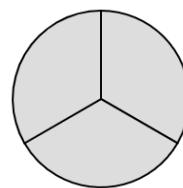
$$\frac{3}{6}$$



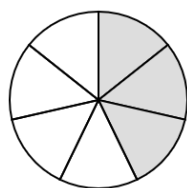
$$\frac{4}{5}$$



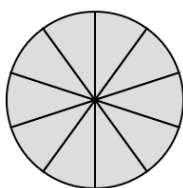
$$\frac{2}{4}$$



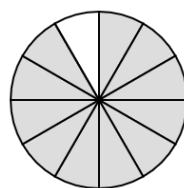
$$\frac{3}{3}$$



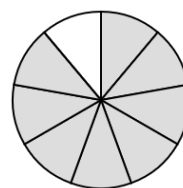
$$\frac{3}{7}$$



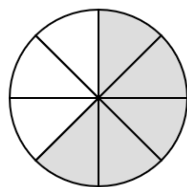
$$\frac{10}{10}$$



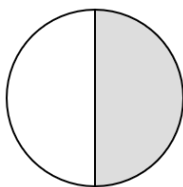
$$\frac{11}{12}$$



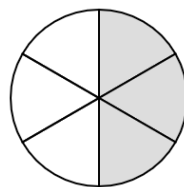
$$\frac{8}{9}$$



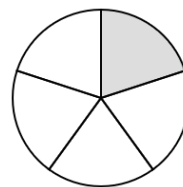
$$\frac{5}{8}$$



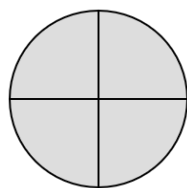
$$\frac{1}{2}$$



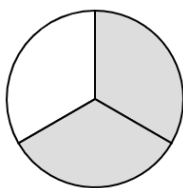
$$\frac{3}{6}$$



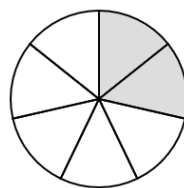
$$\frac{1}{5}$$



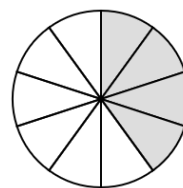
$$\frac{4}{4}$$



$$\frac{2}{3}$$



$$\frac{2}{7}$$



$$\frac{4}{10}$$