



Vejledning til underviseren

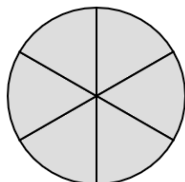
Du har hentet en opgave fra matematiksidens.dk. Den opgave du står med, ligger i mange versioner på hjemmesiden. Derfor er det vigtigt, at du gemmer facitlisten til din version. Du kan se nummeret på din version oppe i højre hjørne. Det betyder, at du efterfølgende ikke kan hente facitlisten på matematiksidens.dk. Det betyder også, at du kan gentage opgaven så mange gange du vil, da det er nye opgaver, hver gang du henter en ny version.

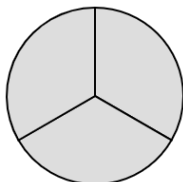


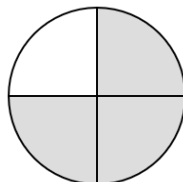
Opgaven

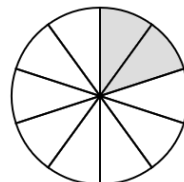
16 opgaver, hvor eleverne ser cirkel, der er inddelt i felter. Nogle af felterne er farvet grå. Eleverne skal skrive, hvor stor en brøkdelen der er grå.

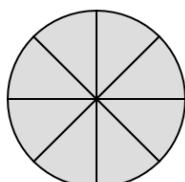
Dit navn: _____

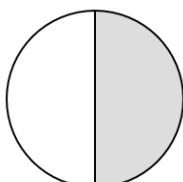
Brøker: Skriv brøkdel**Hvor stor en brøkdel er grå?**

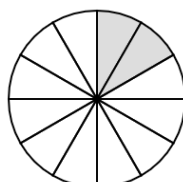


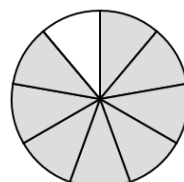


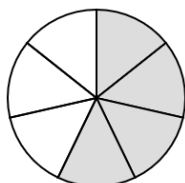


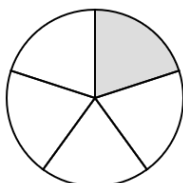


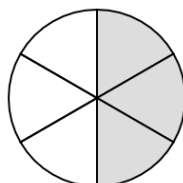


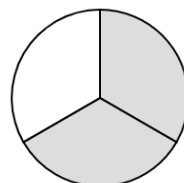


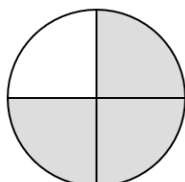


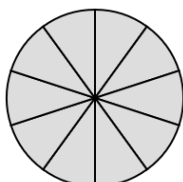


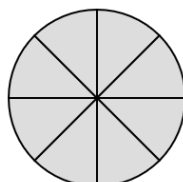


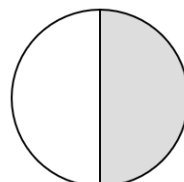




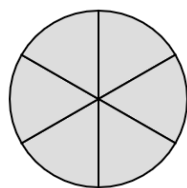




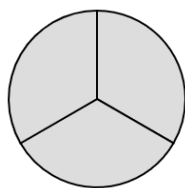




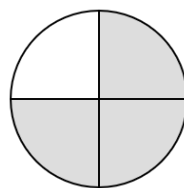
Brøker: Skriv brøkdel - Facitliste



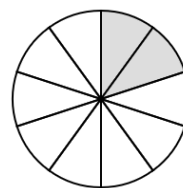
$$\frac{6}{6}$$



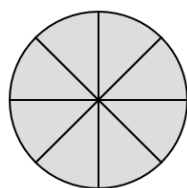
$$\frac{3}{3}$$



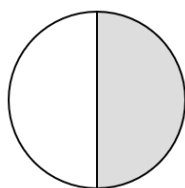
$$\frac{3}{4}$$



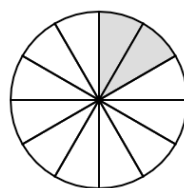
$$\frac{2}{10}$$



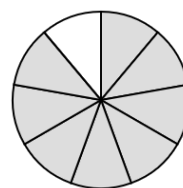
$$\frac{8}{8}$$



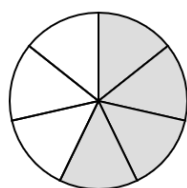
$$\frac{1}{2}$$



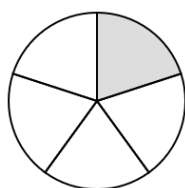
$$\frac{2}{12}$$



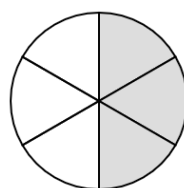
$$\frac{8}{9}$$



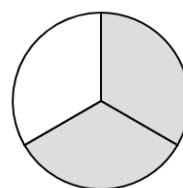
$$\frac{4}{7}$$



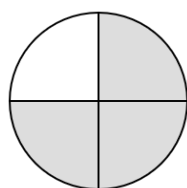
$$\frac{1}{5}$$



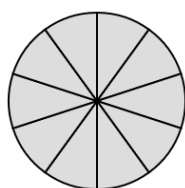
$$\frac{3}{6}$$



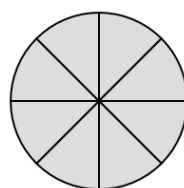
$$\frac{2}{3}$$



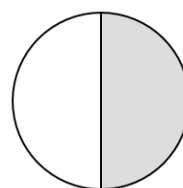
$$\frac{3}{4}$$



$$\frac{10}{10}$$



$$\frac{8}{8}$$



$$\frac{1}{2}$$